

Varied Fluency

Step 1: Describing Movement

National Curriculum Objectives:

Mathematics Year 2: (2P2) [Use mathematical vocabulary to describe position, direction and movement, including movement in a straight line and distinguishing between rotation as a turn and in terms of right angles for quarter, half and three-quarter turns \(clockwise and anticlockwise\)](#)

Differentiation:

Developing Questions to support using language to describe one-step movement of 2D shapes in a straight line (left, right, up, down).

Expected Questions to support using language to describe one-step movement of objects that are facing a direction (forwards, backwards, left, right).

Greater Depth Questions to support using language to describe multi-step movements of objects that are facing a direction (forwards, backwards, left, right).

More [Year 2 Position and Direction](#) resources.

Did you like this resource? Don't forget to [review](#) it on our website.

Describing Movement

1a. In which direction is the triangle moving?



VF

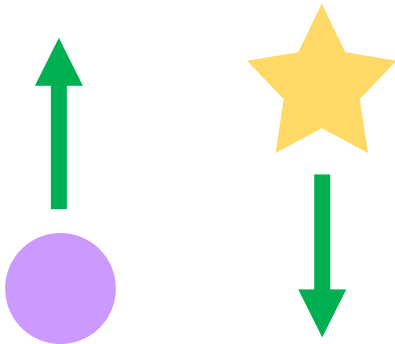
Describing Movement

1b. In which direction is the square moving?



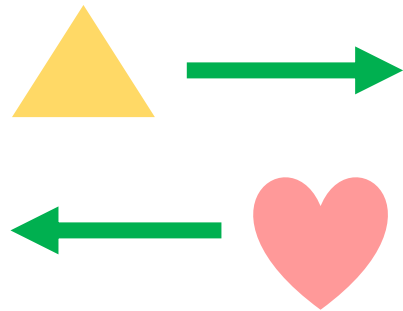
VF

2a. In which direction is each shape moving?



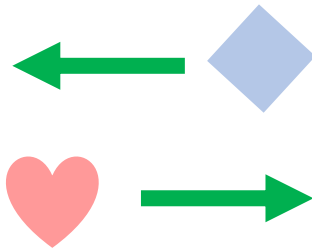
VF

2b. In which direction is each shape moving?



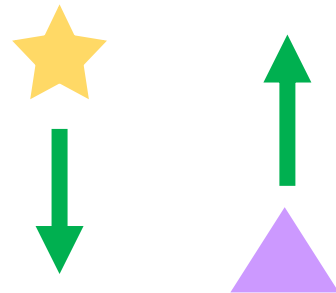
VF

3a. Circle the shape which is moving to the right.




VF

3b. Circle the shape which is moving down.




VF

4a. True or false? The circle is left of the star.



VF

4b. True or false? The star is right of the heart.



VF

Describing Movement

5a. In which direction is the crab moving?



VF

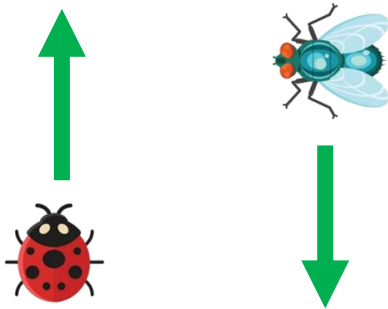
Describing Movement

5b. In which direction is the zebra moving?



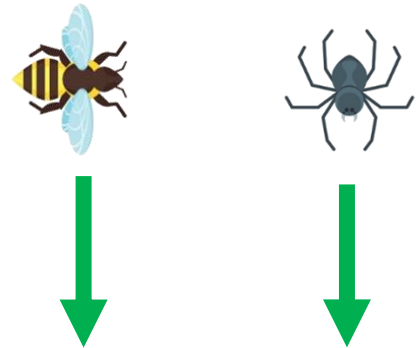
VF

6a. In which direction is each creature moving?



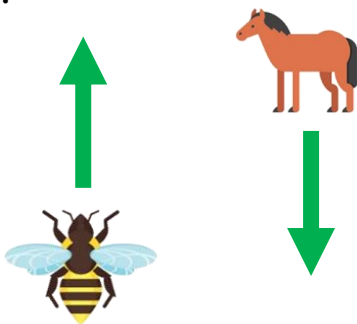
VF

6b. In which direction is each creature moving?



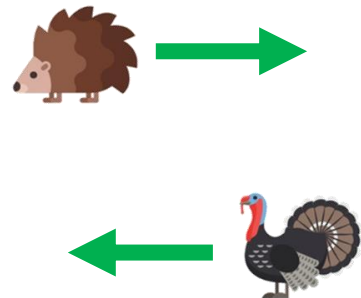
VF

7a. Circle the creature which is moving to the left.




VF

7b. Circle the creature which is moving forwards.




VF

8a. True or false? The hedgehog is to the right of the meerkat.



VF

8b. True or false? The turtle is to the left of the ladybird.



VF

Describing Movement


9a. In which direction is the ladybird moving?



VF

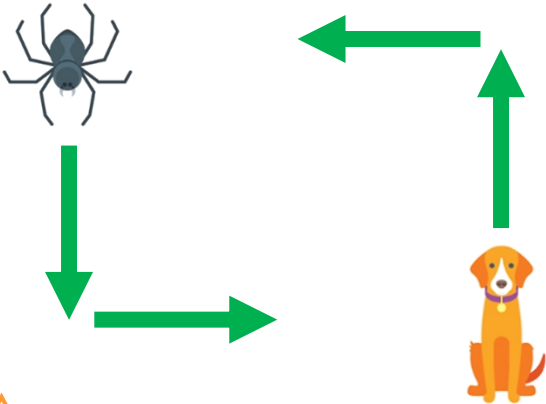
Describing Movement

9b. In which direction is the chicken moving?



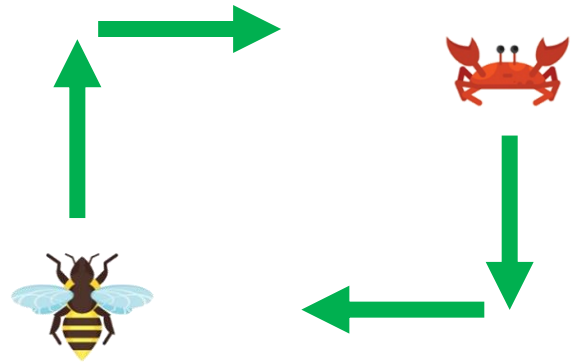
VF

10a. In which direction is each creature moving?



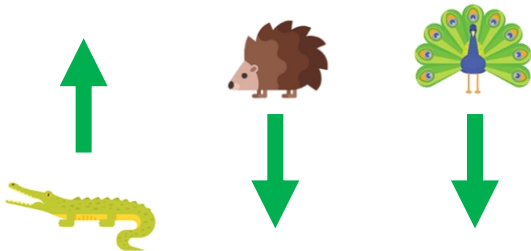
VF

10b. In which direction is each creature moving?




VF

11a. Circle the creature which is moving to the left.




VF

11b. Circle the creature which is moving backwards.




VF

12a. True or false? The kangaroo is to the left of the bird and the right of the frog.



VF

12b. True or false? The tiger is to the right of the ladybird and the left of the bird.



VF

Varied Fluency Describing Movement

Developing

- 1a. The triangle is moving to the right.
- 2a. The circle is moving up and the star is moving down.
- 3a. heart
- 4a. False; the circle is not left of any shape.

Expected

- 5a. The crab is moving left.
- 6a. The ladybird is moving forwards and the fly is moving to the left.
- 7a. horse
- 8a. False; the hedgehog is left of the meerkat.

Greater Depth

- 9a. The ladybird is moving forwards and right.
- 10a. The spider is moving forwards and left; the dog is moving backwards and right.
- 11a. hedgehog
- 12a. False; the kangaroo is right of the bird and right of the frog.

Varied Fluency Describing Movement

Developing

- 1b. The square is moving to the left.
- 2b. The triangle is moving right and the heart is moving left.
- 3b. star
- 4b. False; the star is not right of any shape.

Expected

- 5b. The zebra is moving forwards.
- 6b. The bee is moving right and the spider is moving forwards.
- 7b. turkey
- 8b. True

Greater Depth

- 9b. The chicken is moving forwards and left.
- 10b. The wasp is moving forwards and right; the crab is moving forwards and right.
- 11b. cat
- 12b. False; the tiger is left of the ladybird and left of the bird.